

Monday:

Daily Activities

Morning Meeting: Check out Seesaw each morning!

Spellings: Learn spellings daily.

Writing: Set a timer for 5 minutes and do some "free writing" or "free typing" on a topic of your choice.

Reading: Try to read for at least 15 minutes (or more if you can)!

Maths: Daily 10 **Mental Maths Questions**. Try level 1 or 2.

Skip counting: in 2s backwards from 30. (30, 28, 26, 24, 22, 20, 18, 16, 14, 12, 10, 8, 6, 4, 2, 0)

Tables: Practice 10+ tables.

Whole-school event: Go to the [Mother Language and Multi-Language Fortnight](#) page for today's activity.

1. English:

Spellings.

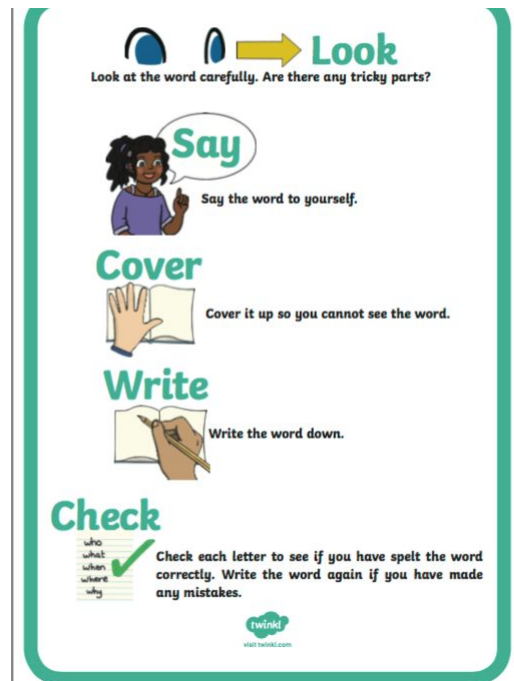
Find the list below.

This week most of your spellings have <si> and make a /sh/ and /zh/ sound.

- Underline the /sh/ and /zh/ sound in 6 of these words.
- Learn the first 4 spellings (fraction, estimate, occasion, division). Have a look at the "Look, Say, Cover, Write, Check" poster here.

Spelling List:

fraction
estimate
occasion
division
revision
invasion
explosion
television
fist
best



Writing.

Choose 6 words from the spelling list and write them in an interesting sentence. You will have 6 sentences in total.

-Check each sentence. Make sure that it makes sense and that you have a capital letter, finger spaces and full stops.

2. Gaeilge- Ag siopadóireacht.

Find today's activity on Seesaw.

There are 3 activities for you to complete.

1. Cuir na pictiúir in ord (Put the pictures in order).
2. Léigh an scéal (Read the story).
3. Bí ag scríobh (Writing. Fill in the blanks).

3. Maths


- Today we are looking at the topic of Area.
- Area is a measure of how much space there is on a flat surface.
- For example, a football pitch has a greater surface area than a basketball court, because the football pitch is bigger!
- Can you think of two surface areas and compare them? Which is bigger in size? No need to write it down, just say it in your head.
- When we think of our classroom in school, the surface area is the flat surface of the size of the floor. Take a look at the questions below. Write down the answers in your copy or a piece of paper.
 1. Which has a greater surface area, your copy or your maths book?
 2. Which has a greater surface area, your chair or the desk?
 3. Which has a greater surface area, a whiteboard or a computer screen?
 4. Which has a greater surface area, a pencil or a paper clip?

- Complete the worksheet below on area




*Challenge- Open the resource titled 'Maths challenge 1' and complete Monday.

Area




A Circle the item with the greatest surface. ✕ the item with the smallest surface.



B Measure the area of this page with the objects below. Estimate first.

object	estimate	area
		
		
		

C Draw the area of these shapes.

		
a 14-unit shape	a 10-unit shape	a 16-unit L shape