

# Wednesday:

## Daily activities

**Spellings:** Learn spellings daily and write 3 of the words in interesting sentences.

**Writing:** Set a timer for 5 minutes and do some "free writing" or "free typing" on a topic of your choice.

**Reading:** Try to read for at least 15 minutes (or more if you can)!

**Maths:** Daily 10 Mental Maths Questions. Try level 1 or 2.

- Skip counting in 4s to 40 (0, 4, 8, 12, 16, 20, 24, 28, 32, 36, 40)
- Weekly tables +7
- <https://www.topmarks.co.uk/maths-games/hit-the-button>. Click the link, go to doubles and play doubles to 10. Have fun!

### 1. English:

- Learn your last 3 spellings - nightmare, millilitre, litre. Anita will help you here.
- Write each word in an interesting sentence. Check each sentence. Make sure that it makes sense and that you have a capital letter, finger spaces and full stops.

\*Challenge. Silly sentence! Write one sentence using as many <are> words as you can!

### 2. Maths:

- Can you think of the coins from 1c to €2? There are 8 altogether!
- Write them down on a page or in your copy
- In your head, can you think of 3 different ways to make 20c? How many different coins did you use?
- Now, in your copy, try to write down 3 different ways of making 50c and 3 different ways of making €1.
- Complete the worksheet below.

\*Challenge-Complete Wednesday on the problem solving worksheet

# Money

Wednesday 29<sup>th</sup>

**A** Answer the questions. You may use each coin more than once.



- |   |   |
|---|---|
| 1. Which 2 coins make up 30c?<br><u>10c 20c</u> | 2. Which 2 coins make up 40c?<br>_____    |
| 3. Which 3 coins make up 15c?<br>_____          | 4. Which 3 coins make up 20c?<br>_____    |
| 5. Which 5 coins make up 19c?<br>_____          | 6. Which 5 coins make up 21c?<br>_____    |
| 7. Which 7 coins make up 61c?<br>_____          | 8. Which 7 coins make up 50c?<br>_____    |
| 9. Which 4 coins make up 76c?<br>_____          | 10. Which 4 coins make up 80c?<br>_____   |
| 11. Which 10 coins make up 16c?<br>_____        | 12. Which 10 coins make up 14c?<br>_____  |
| 13. Which 6 coins make up €2.00?<br>_____       | 14. Which 5 coins make up €1.60?<br>_____ |

## **B** Puzzle.

Sam bought a comic using only these coins:  
It cost 50c. There are 12 different ways to  
pay 50c using these coins. Find as many as you can!  
(You can use each coin more than once.)




---



---



---






---



---















# MONDAY

- $3 + 8 =$  \_\_\_\_\_
- A cube has 6 \_\_\_\_\_ faces.  
☐ circular   ☐ rectangular  
☐ triangular   ☐ square
-  \_\_\_\_\_ o'clock
- $30 + 10 =$  \_\_\_\_\_
- $10 - 8 =$  \_\_\_\_\_
-   
Which jug can hold 1 litre?
- Draw the mirror image.  

- $30, 32, \dots, 36,$   
 \_\_\_\_\_ 40
- Colour the odd numbers.  

34	30	29	31
27	35	23	
- Write the numeral  
seventy-four  
 \_\_\_\_\_

# TUESDAY

-  It is half past \_\_\_\_\_
- $11 - 4 =$  \_\_\_\_\_
- $30 + 40 =$  \_\_\_\_\_
- Round 73 \_\_\_\_\_
- Colour the block to balance the scales.  
 $\frac{1}{4}$  kg   $\frac{1}{4}$  kg  1 kg 
- Colour the block to balance the scales.  
 $\frac{1}{4}$  kg   $\frac{1}{4}$  kg  1 kg 
- How many more  
boxes to fill the  
jug?  \_\_\_\_\_
-  =  \_\_\_\_\_  
 =  \_\_\_\_\_
- $12 - \dots = 9$
- Quarter to \_\_\_\_\_  
 \_\_\_\_\_  
 or \_\_\_\_\_ 45

# WEDNESDAY

- It is quarter past \_\_\_\_\_  
 or \_\_\_\_\_ 
- $4 + 8 =$  \_\_\_\_\_
- $7 - 5 =$  \_\_\_\_\_
- It is \_\_\_\_\_  past \_\_\_\_\_
- $$\begin{array}{r} 37 \\ + 22 \\ \hline \end{array}$$
-   
Colour  $\frac{1}{4}$  of each rectangle.
- Round 89 \_\_\_\_\_
-   
 Yesterday this pencil was 12 cm. How much shorter is it today?  
 \_\_\_\_\_ cm
- Tick the 5c coins that equal the total.  

- Write as digital time.  
    :

### 3. PE

-30 high knees: These are fun, stand with your back straight and bring your knees up one at a time and count to 30.

-10 push ups: Find a safe place on the floor and try to do 10, they are great for the muscles in our arms

-30 shoulder press: Raise both hands in the air 30 times as fast as you can, it's fun!

-20 forward lunges: Step forward and make sure to keep your back straight, lunges are great for the muscles in our legs! Do you remember doing these in the sports hall?

-20 squats: These are a really fun exercise for the muscles in our legs, you may remember these from our fitness circuit in the sports hall in school.

### 4. Science.

Read over the questions and answers you worked on yesterday.

Now, let's see if you can remember the different stages of the lifecycle of the dandelion!

- Draw the lifecycle and label each stage.
- Remember there are 5 stages in total!